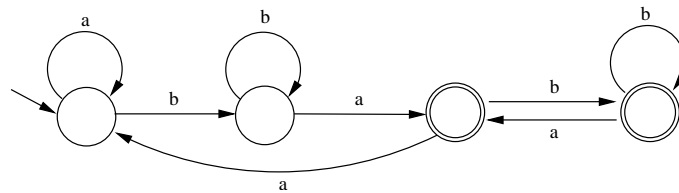


Discrete Event Systems

Exercise 2: Sample Solution

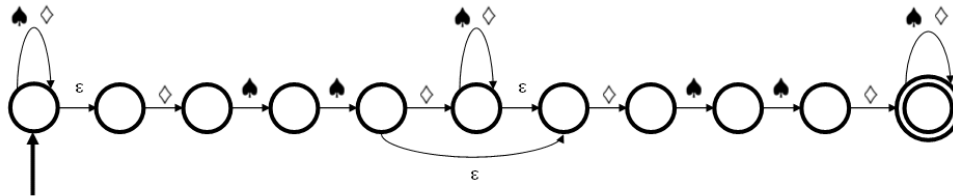
1 Filter for an Input Stream

The following automaton correctly filters the input stream.

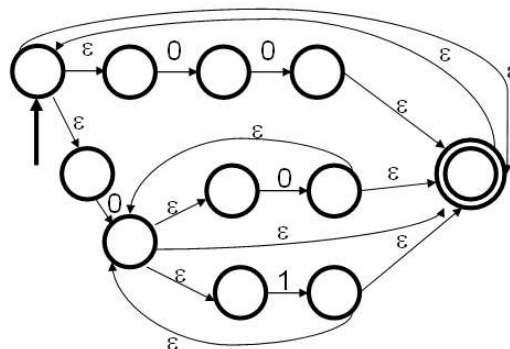


2 Nondeterministic Finite Automata

a) The following automaton is an example



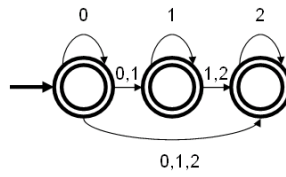
b) The following automaton is an example.



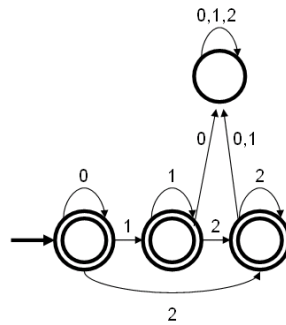
c) A deterministic machine whose states are all accepting accepts *every* string of the corresponding alphabet. However, this does not hold for a nondeterministic automaton, namely if it is under-determined.

3 De-randomization

a) The automaton accepts the strings $0^*1^*2^*$. Without ε -transitions we have

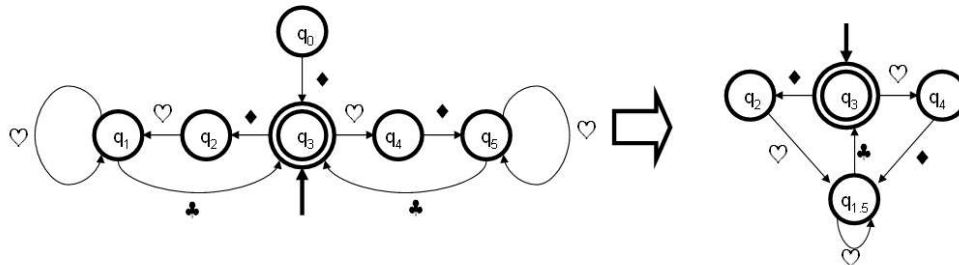


b) The nondeterministic automaton can be found by applying the power set construction presented in the lecture followed by the state minimization algorithm. However, it is obvious that the automaton shown below does the job.



4 States Minimization

State q_0 can be omitted as it is not reachable. Moreover, states q_1 and q_5 can be merged, as there is no input sequence which will show a difference between these two states.



5 “Regular” Operations in UNIX

In UNIX, the special symbol “\$” stands for the end of a line. We have:
`egrep -i '(password|passwort)(a|e|i|o|u)*$'`